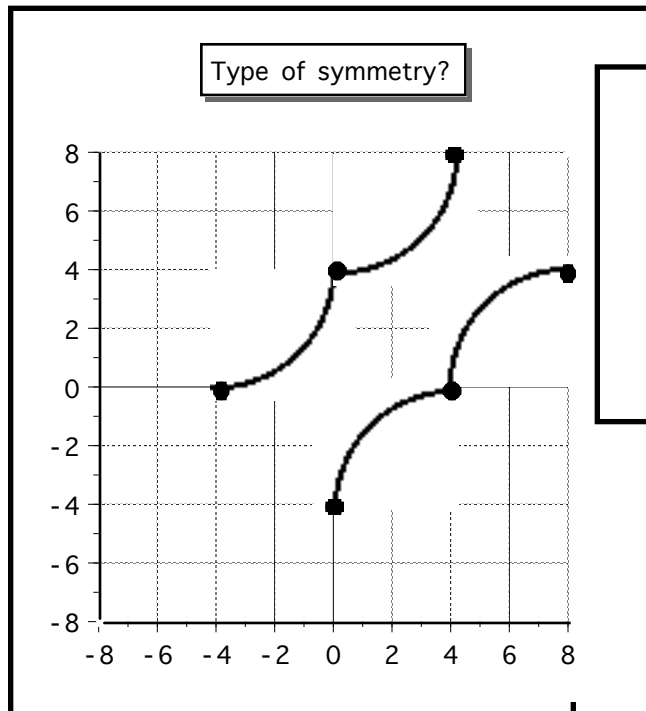



college algebra

math 111

Type of symmetry?

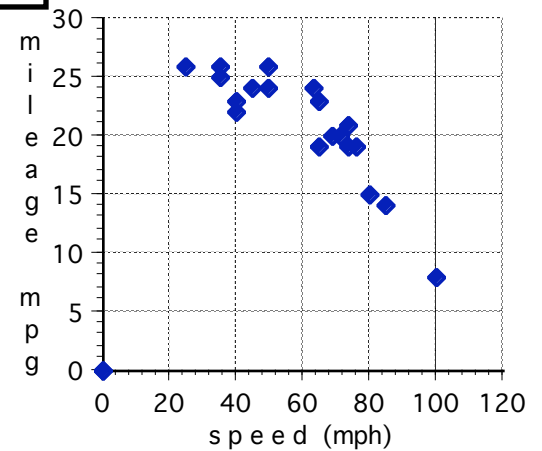


place bar code here



precalculus

Jeep Grand Cherokee 2000



braking distance and matrix multiplication

$$\begin{bmatrix} 0 & 0 & 1 \\ 3600 & 60 & 1 \\ 4900 & 70 & 1 \end{bmatrix} \begin{bmatrix} a \\ b \\ c \end{bmatrix} = \begin{bmatrix} 0 \\ 120 \\ 170 \end{bmatrix}$$

Does each graph have symmetry with respect to a) the x axis b) the y axis c) the origin?

